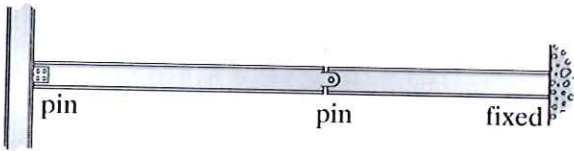


Example 2b-3: Classify each structure as determinate, indeterminate, or unstable.



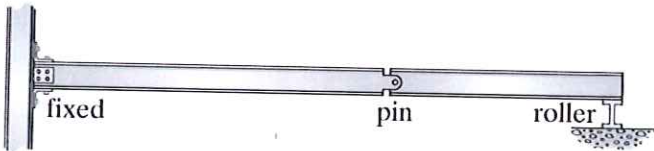
$$r = 7$$

$$r > 3n$$

$$n = 2$$

INDETERMINATE

1st DEGREE

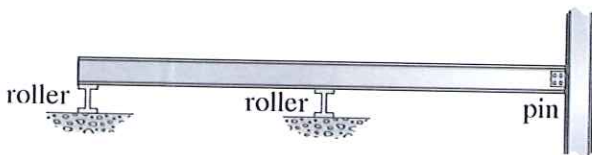


$$r = 6$$

$$r = 3n$$

$$n = 2$$

DETERMINATE



$$r = 4$$

$$r > 3n$$

$$n = 1$$

INDETERMINATE

1st DEGREE