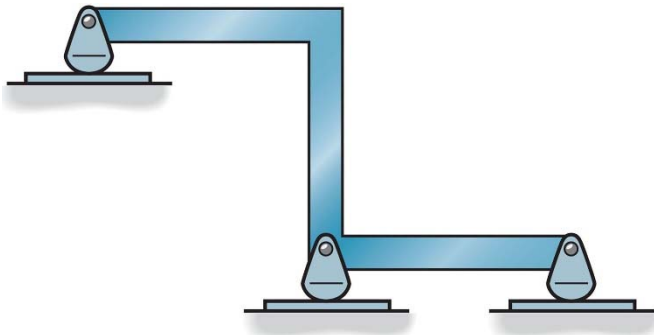
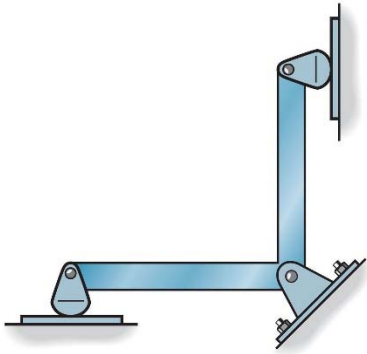
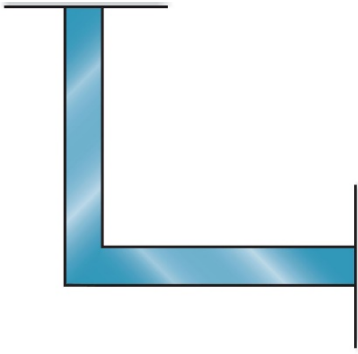


**Example 2b-1:** Classify each structure as determinate, indeterminate, or unstable.



**Example 2b-2:** Classify each structure as determinate, indeterminate, or unstable.



**Example 2b-3:** Classify each structure as determinate, indeterminate, or unstable.

